



NAME : _____ PERIOD _____



STAAR MIXED REVIEW QUESTIONS

Instructions: Solve each question. Be sure to show work. No work, No credit!!

1. Students in Mrs. Guerro's class must complete at least 40 math problems for homework every week. The table shows the progress of four students on Wednesday.

Homework Progress

Student	Amount Completed
Katie	0.4
D'Angelo	$\frac{45}{40}$
Grace	100%
Jonah	$\frac{2}{3}$

List the people in order from the most amount of homework completed to the least amount.

NAMES OF
FINAL ANSWER

1. _____
2. _____
3. _____
4. _____

2. Put the following letters in order from least to greatest, based on the fraction sizes:

ORDER OF THE
LETTERS

1. _____
2. _____
3. _____
4. _____
5. _____

A

$\frac{6}{15}$

B

0.5

C

$\frac{3}{8}$

D

0.287

E

32%

3.

					.		
+	0	0	0	0		0	0
−	1	1	1	1		1	1
	2	2	2	2		2	2
	3	3	3	3		3	3
	4	4	4	4		4	4
	5	5	5	5		5	5
	6	6	6	6		6	6
	7	7	7	7		7	7
	8	8	8	8		8	8
	9	9	9	9		9	9

A teacher wrote this expression on the board.

$$(-6)(2) + (-8 \div 4)$$

What is the value of this expression?

4. Ella played a math game and had the cards shown. Her score was the sum of the numbers on these five cards. What was Ella's score?

					.		
+	0	0	0	0		0	0
−	1	1	1	1		1	1
	2	2	2	2		2	2
	3	3	3	3		3	3
	4	4	4	4		4	4
	5	5	5	5		5	5
	6	6	6	6		6	6
	7	7	7	7		7	7
	8	8	8	8		8	8
	9	9	9	9		9	9

7

-9

-4

15

-10

5. This week, 50 players signed up for the junior soccer league. Of those who signed up, $\frac{3}{5}$ have paid their dues. How many players have paid their dues?

					.		
+	0	0	0	0		0	0
−	1	1	1	1		1	1
	2	2	2	2		2	2
	3	3	3	3		3	3
	4	4	4	4		4	4
	5	5	5	5		5	5
	6	6	6	6		6	6
	7	7	7	7		7	7
	8	8	8	8		8	8
	9	9	9	9		9	9

6. SOLVE: $\frac{3}{5} \div \frac{7}{8}$

FINAL ANSWER

7. What is the prime factorization of 110? WRITE YOUR FINAL ANSWER IN EXPONENTIAL FORM.

FINAL ANSWER

8. What is the answer to the following problem: $90 - 2(60 \div 10) - 4$

FINAL ANSWER

9. A restaurant offered cooking classes on 24 of the 30 days in November. What decimal is equivalent to the fraction of days in November that classes were offered at the restaurant?

					.		
+	0	0	0	0		0	0
−	1	1	1	1		1	1
	2	2	2	2		2	2
	3	3	3	3		3	3
	4	4	4	4		4	4
	5	5	5	5		5	5
	6	6	6	6		6	6
	7	7	7	7		7	7
	8	8	8	8		8	8
	9	9	9	9		9	9

10. SOLVE: Quinlan pays \$178 every 4 months for his guitar lessons. At this rate, how much will Quinlan pay for 3 years of guitar lessons?





FINAL ANSWER

11. A company predicts that this year's sales will be equivalent to 144% of last year's sales. What fraction does 144% represent?

FINAL ANSWER

12. On Saturday Kai gave his guinea pig 80 grams of food. The table shows the amount of each type of food he gave to the guinea pig.

Guinea Pig Food

Type of Food	Amount of Food (grams)	Key for Bar Graph
Hay	40	
Alfalfa pellets	20	
Tomatoes	10	
Lettuce	10	

Find the percentages for each type of food:

FINAL ANSWERS

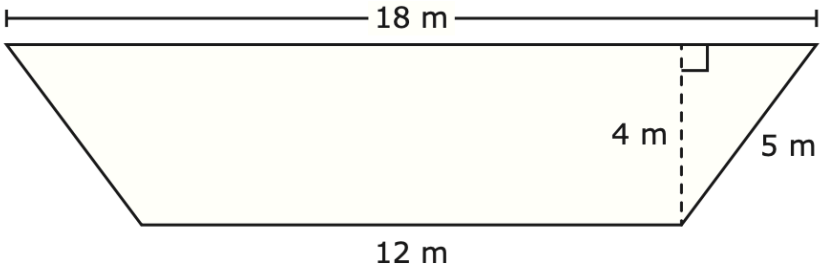
_____ % = HAY

_____ % = ALFALFA PELLETS

_____ % = TOMATOES

_____ % = LETTUCE

13. The dimensions of a lawn shaped like a trapezoid are given in meters.




What is the area of the lawn in square meters?

AREA	
Triangle	$A = \frac{1}{2}bh$
Rectangle or parallelogram	$A = bh$
Trapezoid	$A = \frac{1}{2}(b_1 + b_2)h$

FINAL ANSWER

14. What percentage is represented by the following image?

FINAL ANSWER



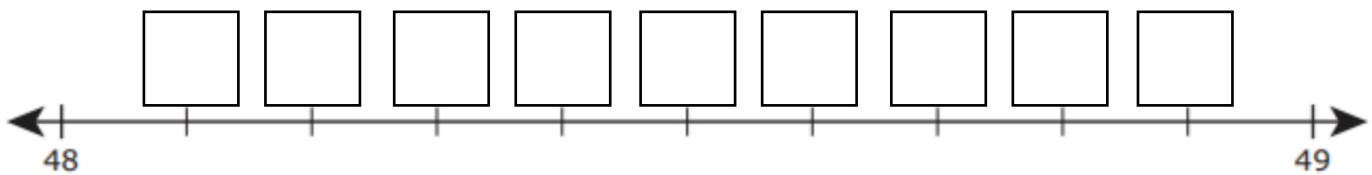
15. Correctly label the A, B, C, & D locations for the following numbers on the number line:

$$A = 48\frac{24}{60}$$

$$B = 48\frac{77}{110}$$

$$C = 48\frac{5}{25}$$

$$D = 48\frac{3}{5}$$



16. SOLVE: $\frac{2}{7} \cdot 4 =$

FINAL ANSWER